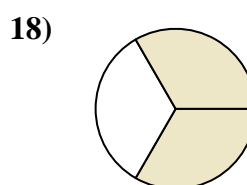
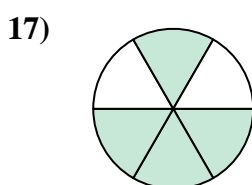

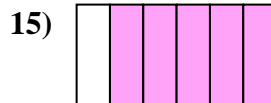
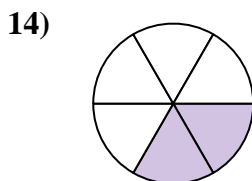
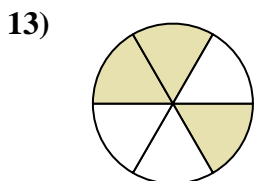
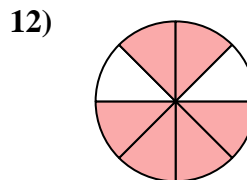
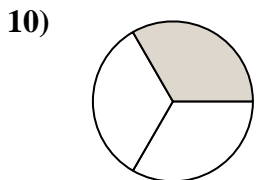
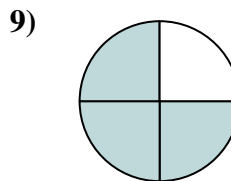
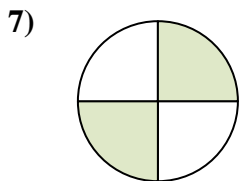
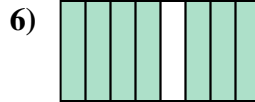
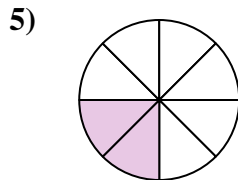
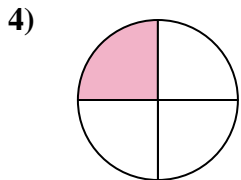
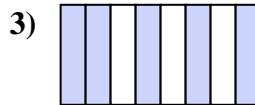
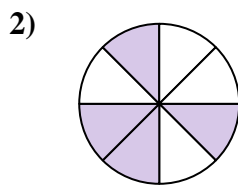




Write the shaded amount as a fraction of the whole amount.



Answers

1. \_\_\_\_\_

2. \_\_\_\_\_

3. \_\_\_\_\_

4. \_\_\_\_\_

5. \_\_\_\_\_

6. \_\_\_\_\_

7. \_\_\_\_\_

8. \_\_\_\_\_

9. \_\_\_\_\_

10. \_\_\_\_\_

11. \_\_\_\_\_

12. \_\_\_\_\_

13. \_\_\_\_\_

14. \_\_\_\_\_

15. \_\_\_\_\_

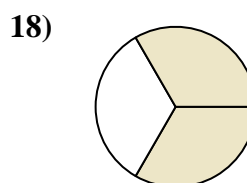
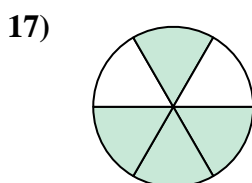

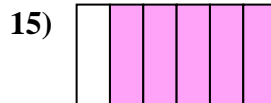
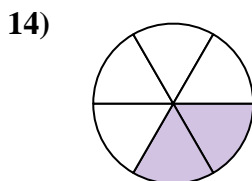
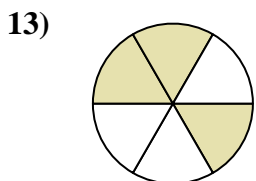
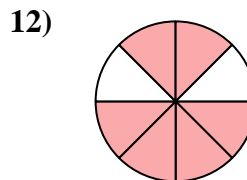
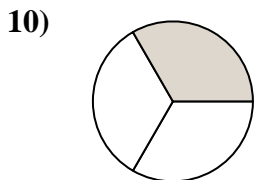
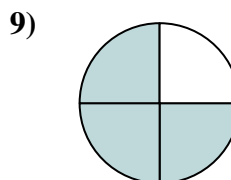
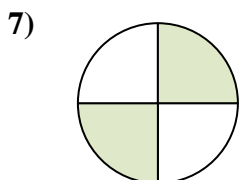
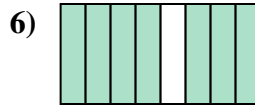
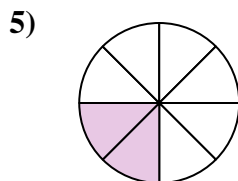
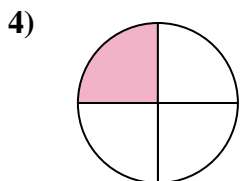
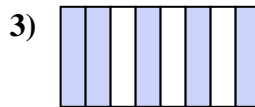
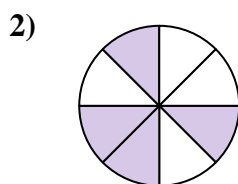
16. \_\_\_\_\_

17. \_\_\_\_\_

18. \_\_\_\_\_



Write the shaded amount as a fraction of the whole amount.



Answers

1.  $\frac{3}{8}$

2.  $\frac{4}{8}$

3.  $\frac{5}{8}$

4.  $\frac{1}{4}$

5.  $\frac{2}{8}$

6.  $\frac{7}{8}$

7.  $\frac{2}{4}$

8.  $\frac{1}{8}$

9.  $\frac{3}{4}$

10.  $\frac{1}{3}$

11.  $\frac{1}{6}$

12.  $\frac{6}{8}$

13.  $\frac{3}{6}$

14.  $\frac{2}{6}$

15.  $\frac{5}{6}$

16.  $\frac{1}{2}$

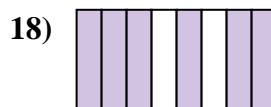
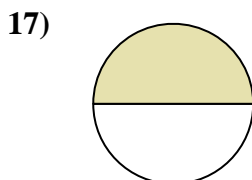
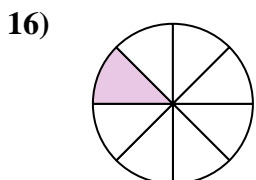
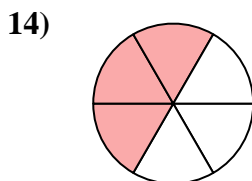
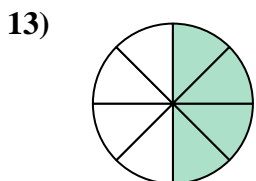
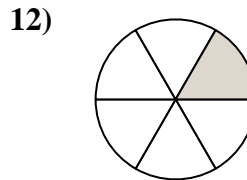
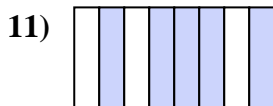
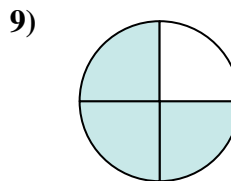
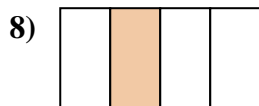
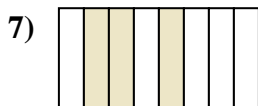
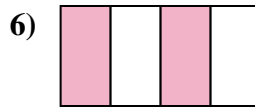
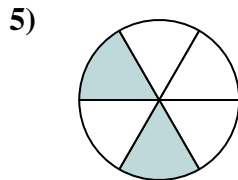
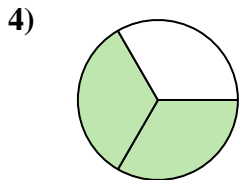
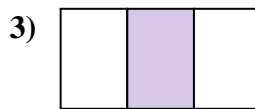
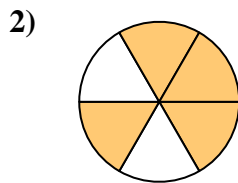
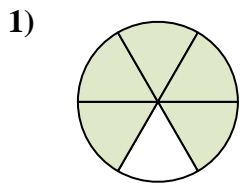
17.  $\frac{4}{6}$

18.  $\frac{2}{3}$



Write the shaded amount as a fraction of the whole amount.

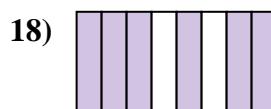
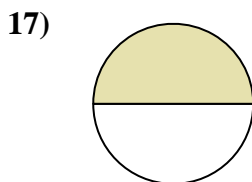
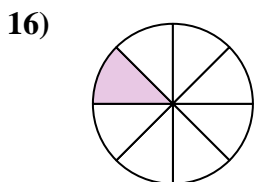
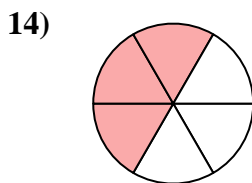
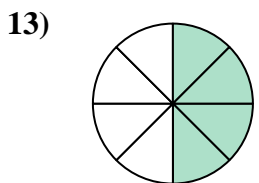
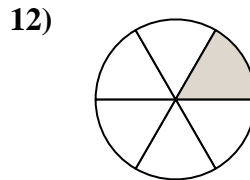
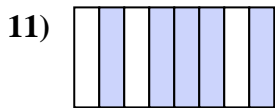
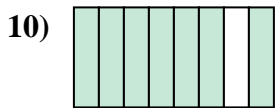
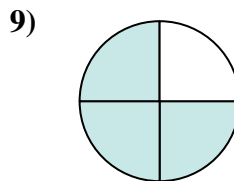
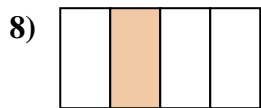
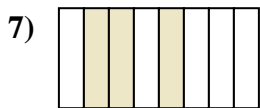
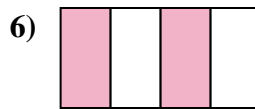
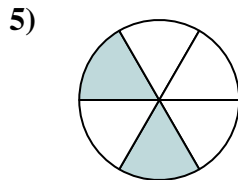
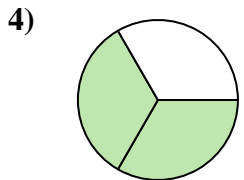
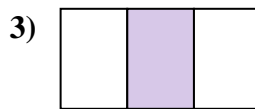
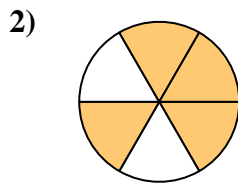
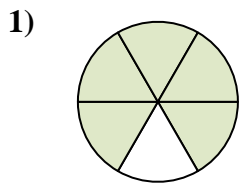
Answers



1. \_\_\_\_\_
2. \_\_\_\_\_
3. \_\_\_\_\_
4. \_\_\_\_\_
5. \_\_\_\_\_
6. \_\_\_\_\_
7. \_\_\_\_\_
8. \_\_\_\_\_
9. \_\_\_\_\_
10. \_\_\_\_\_
11. \_\_\_\_\_
12. \_\_\_\_\_
13. \_\_\_\_\_
14. \_\_\_\_\_
15. \_\_\_\_\_
16. \_\_\_\_\_
17. \_\_\_\_\_
18. \_\_\_\_\_



Write the shaded amount as a fraction of the whole amount.



Answers

1.  $\frac{5}{6}$

2.  $\frac{4}{6}$

3.  $\frac{1}{3}$

4.  $\frac{2}{3}$

5.  $\frac{2}{6}$

6.  $\frac{2}{4}$

7.  $\frac{3}{8}$

8.  $\frac{1}{4}$

9.  $\frac{3}{4}$

10.  $\frac{7}{8}$

11.  $\frac{5}{8}$

12.  $\frac{1}{6}$

13.  $\frac{4}{8}$

14.  $\frac{3}{6}$

15.  $\frac{2}{8}$


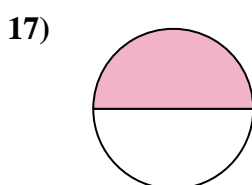
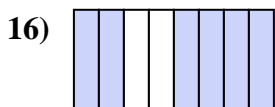
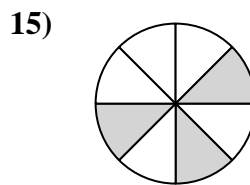
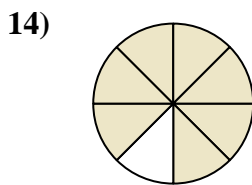
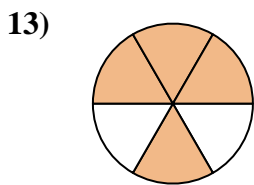
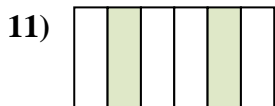
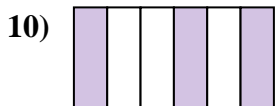
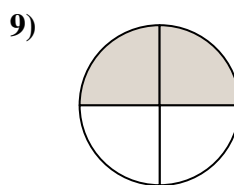

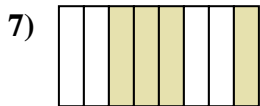
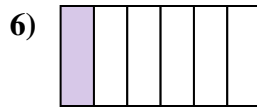

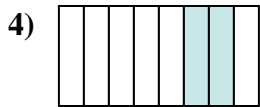
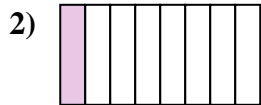
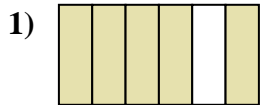
16.  $\frac{1}{8}$

17.  $\frac{1}{2}$

18.  $\frac{6}{8}$



Write the shaded amount as a fraction of the whole amount.



Answers

1. \_\_\_\_\_

2. \_\_\_\_\_

3. \_\_\_\_\_

4. \_\_\_\_\_

5. \_\_\_\_\_

6. \_\_\_\_\_

7. \_\_\_\_\_

8. \_\_\_\_\_

9. \_\_\_\_\_

10. \_\_\_\_\_

11. \_\_\_\_\_

12. \_\_\_\_\_

13. \_\_\_\_\_

14. \_\_\_\_\_

15. \_\_\_\_\_


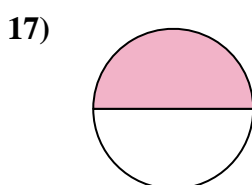
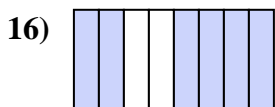
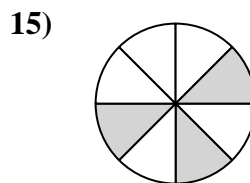
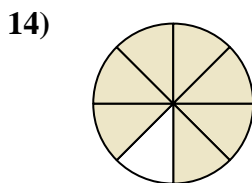
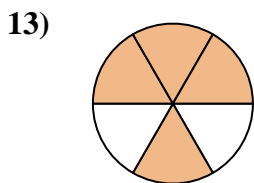

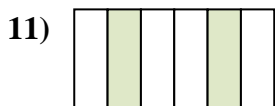
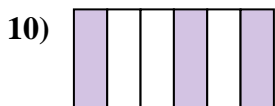
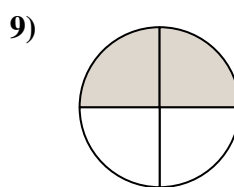

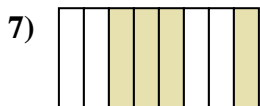
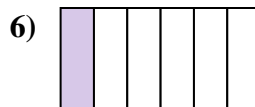

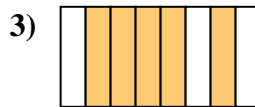
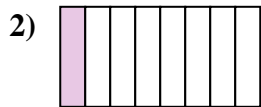
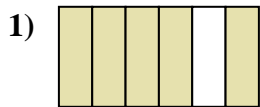
16. \_\_\_\_\_

17. \_\_\_\_\_

18. \_\_\_\_\_



Write the shaded amount as a fraction of the whole amount.



Answers

1.  $\frac{5}{6}$

2.  $\frac{1}{8}$

3.  $\frac{5}{8}$

4.  $\frac{2}{8}$

5.  $\frac{2}{3}$

6.  $\frac{1}{6}$

7.  $\frac{4}{8}$

8.  $\frac{1}{3}$

9.  $\frac{2}{4}$

10.  $\frac{3}{6}$

11.  $\frac{2}{6}$

12.  $\frac{3}{4}$

13.  $\frac{4}{6}$

14.  $\frac{7}{8}$

15.  $\frac{3}{8}$

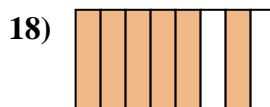
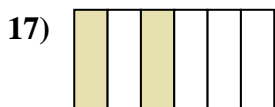


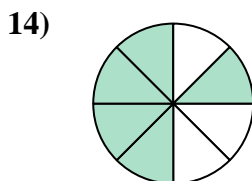
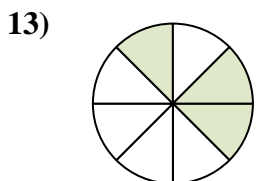
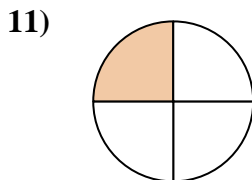
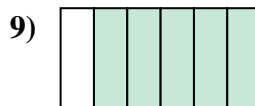
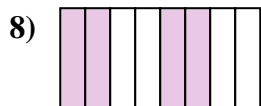
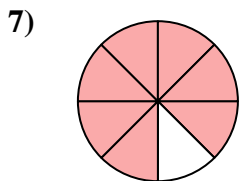
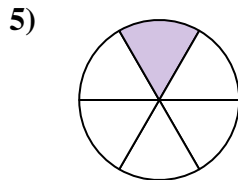
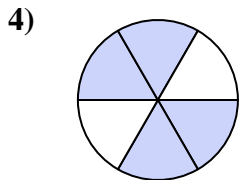
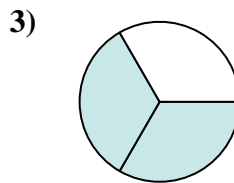
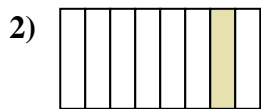
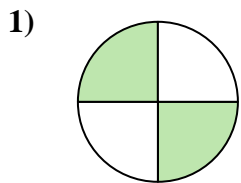
16.  $\frac{6}{8}$

17.  $\frac{1}{2}$

18.  $\frac{1}{4}$



Write the shaded amount as a fraction of the whole amount.



Answers

1. \_\_\_\_\_

2. \_\_\_\_\_

3. \_\_\_\_\_

4. \_\_\_\_\_

5. \_\_\_\_\_

6. \_\_\_\_\_

7. \_\_\_\_\_

8. \_\_\_\_\_

9. \_\_\_\_\_

10. \_\_\_\_\_

11. \_\_\_\_\_

12. \_\_\_\_\_

13. \_\_\_\_\_

14. \_\_\_\_\_

15. \_\_\_\_\_

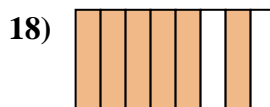
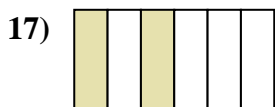


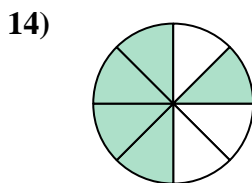
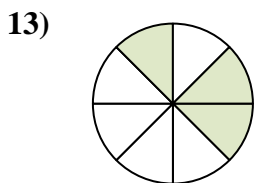
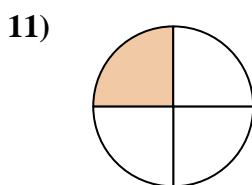
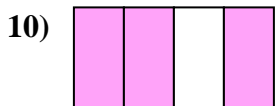
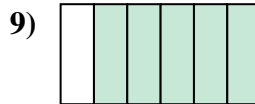
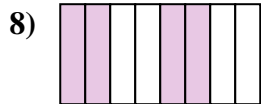
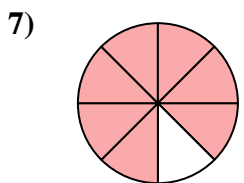
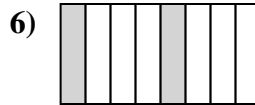
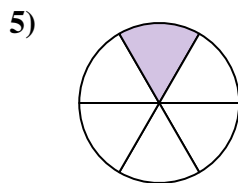
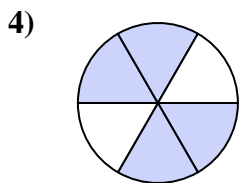
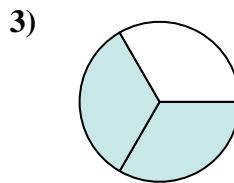
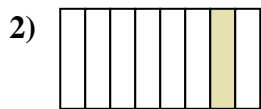
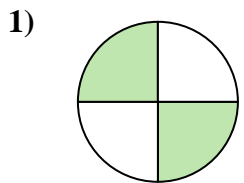
16. \_\_\_\_\_

17. \_\_\_\_\_

18. \_\_\_\_\_



Write the shaded amount as a fraction of the whole amount.



**Answers**

1.  $\frac{2}{4}$

2.  $\frac{1}{8}$

3.  $\frac{2}{3}$

4.  $\frac{4}{6}$

5.  $\frac{1}{6}$

6.  $\frac{2}{8}$

7.  $\frac{7}{8}$

8.  $\frac{4}{8}$

9.  $\frac{5}{6}$

10.  $\frac{3}{4}$

11.  $\frac{1}{4}$

12.  $\frac{3}{6}$

13.  $\frac{3}{8}$

14.  $\frac{5}{8}$

15.  $\frac{1}{2}$

16.  $\frac{1}{3}$

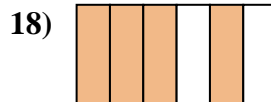
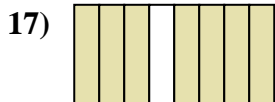
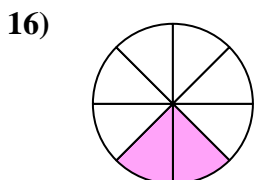

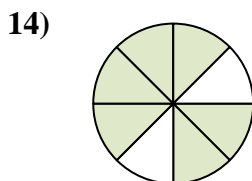
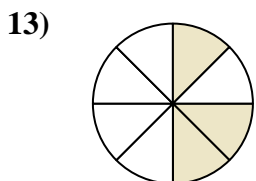
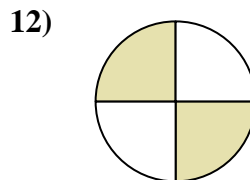

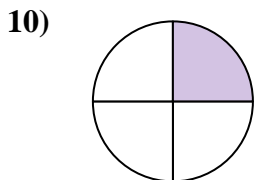
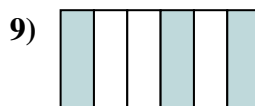
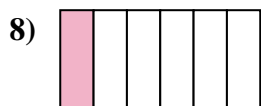
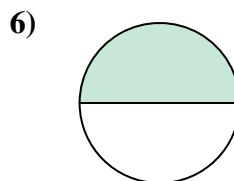
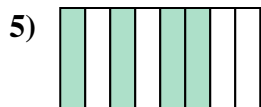
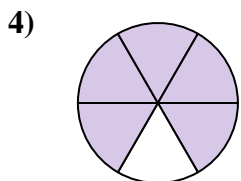
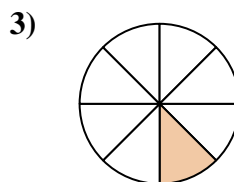
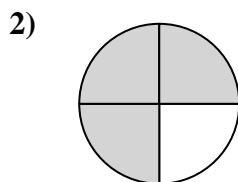
17.  $\frac{2}{6}$

18.  $\frac{6}{8}$





Write the shaded amount as a fraction of the whole amount.



Answers

1. \_\_\_\_\_

2. \_\_\_\_\_

3. \_\_\_\_\_

4. \_\_\_\_\_

5. \_\_\_\_\_

6. \_\_\_\_\_

7. \_\_\_\_\_

8. \_\_\_\_\_

9. \_\_\_\_\_

10. \_\_\_\_\_

11. \_\_\_\_\_

12. \_\_\_\_\_

13. \_\_\_\_\_

14. \_\_\_\_\_

15. \_\_\_\_\_

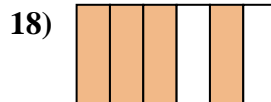
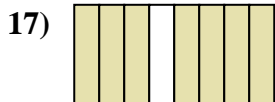
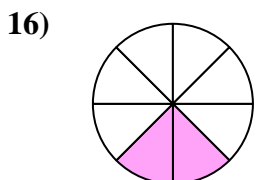

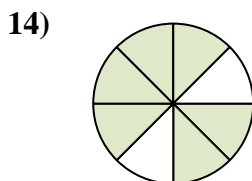
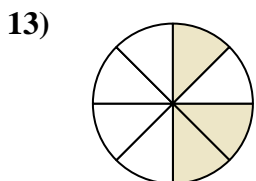
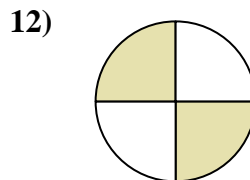
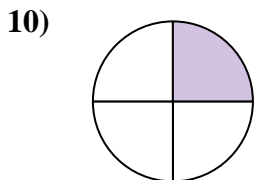
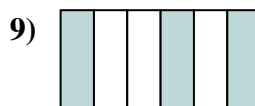
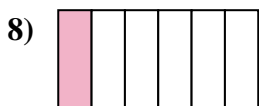
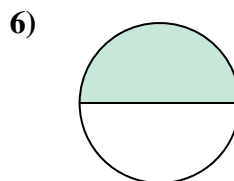
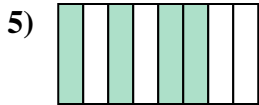
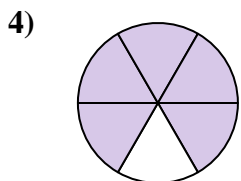
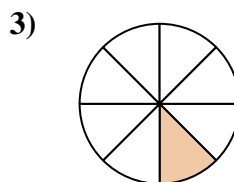
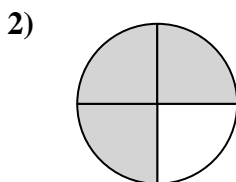
16. \_\_\_\_\_

17. \_\_\_\_\_

18. \_\_\_\_\_



Write the shaded amount as a fraction of the whole amount.



Answers

1.  $\frac{2}{6}$

2.  $\frac{3}{4}$

3.  $\frac{1}{8}$

4.  $\frac{5}{6}$

5.  $\frac{4}{8}$

6.  $\frac{1}{2}$

7.  $\frac{5}{8}$

8.  $\frac{1}{6}$

9.  $\frac{3}{6}$

10.  $\frac{1}{4}$

11.  $\frac{1}{3}$

12.  $\frac{2}{4}$

13.  $\frac{3}{8}$

14.  $\frac{6}{8}$

15.  $\frac{2}{3}$

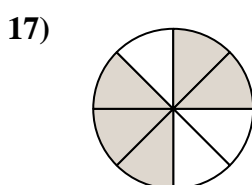
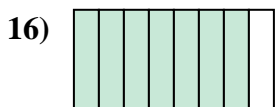
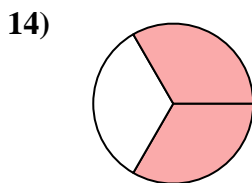
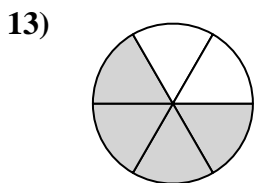


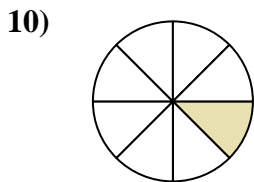
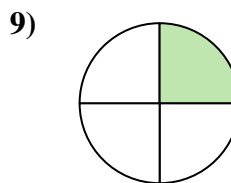

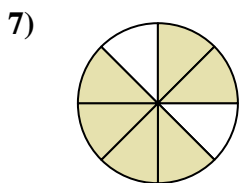
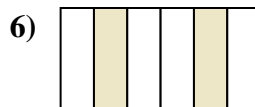
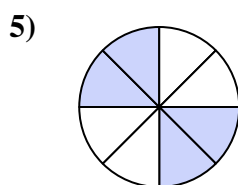
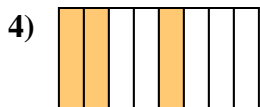
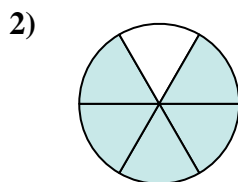
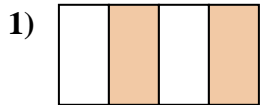
16.  $\frac{2}{8}$

17.  $\frac{7}{8}$

18.  $\frac{4}{6}$



Write the shaded amount as a fraction of the whole amount.



Answers

1. \_\_\_\_\_

2. \_\_\_\_\_

3. \_\_\_\_\_

4. \_\_\_\_\_

5. \_\_\_\_\_

6. \_\_\_\_\_

7. \_\_\_\_\_

8. \_\_\_\_\_

9. \_\_\_\_\_

10. \_\_\_\_\_

11. \_\_\_\_\_

12. \_\_\_\_\_

13. \_\_\_\_\_

14. \_\_\_\_\_

15. \_\_\_\_\_

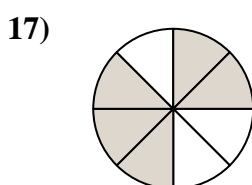
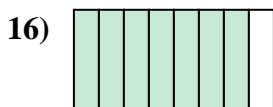
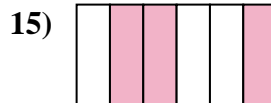
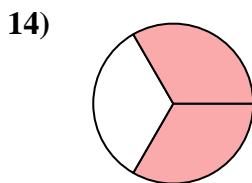
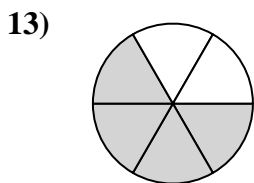


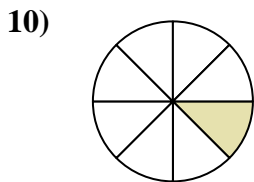
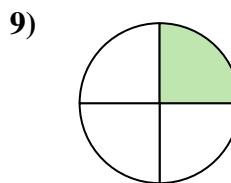

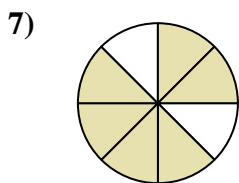
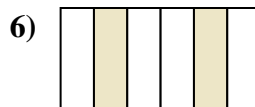
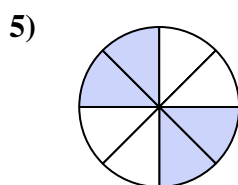
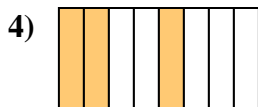
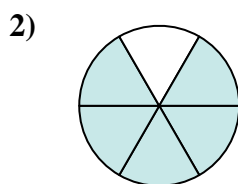
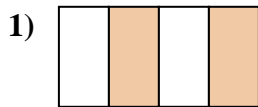
16. \_\_\_\_\_

17. \_\_\_\_\_

18. \_\_\_\_\_



Write the shaded amount as a fraction of the whole amount.



**Answers**

1.  $\frac{2}{4}$

2.  $\frac{5}{6}$

3.  $\frac{1}{6}$

4.  $\frac{3}{8}$

5.  $\frac{4}{8}$

6.  $\frac{2}{6}$

7.  $\frac{6}{8}$

8.  $\frac{1}{3}$

9.  $\frac{1}{4}$

10.  $\frac{1}{8}$

11.  $\frac{1}{2}$

12.  $\frac{3}{4}$

13.  $\frac{4}{6}$

14.  $\frac{2}{3}$

15.  $\frac{3}{6}$




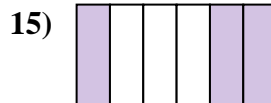
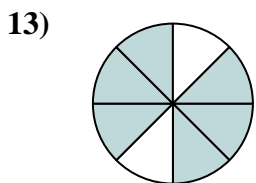
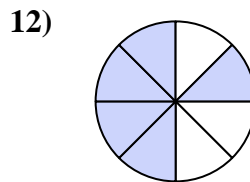
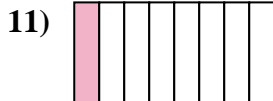
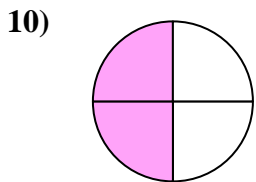
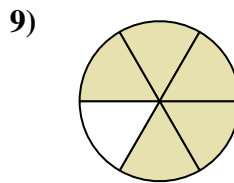
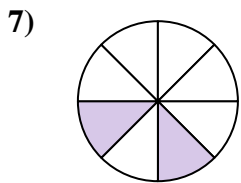
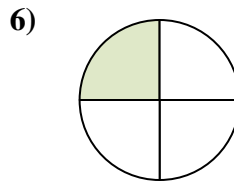
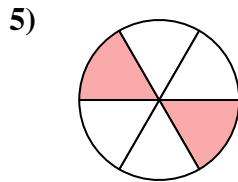
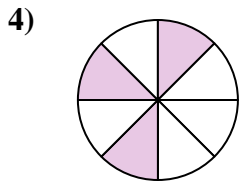
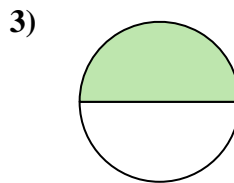
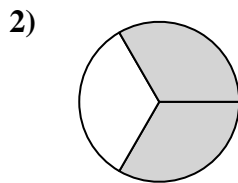
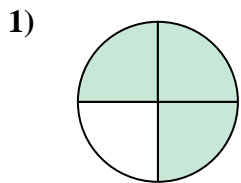
16.  $\frac{7}{8}$

17.  $\frac{5}{8}$

18.  $\frac{2}{8}$



Write the shaded amount as a fraction of the whole amount.



Answers

1. \_\_\_\_\_

2. \_\_\_\_\_

3. \_\_\_\_\_

4. \_\_\_\_\_

5. \_\_\_\_\_

6. \_\_\_\_\_

7. \_\_\_\_\_

8. \_\_\_\_\_

9. \_\_\_\_\_

10. \_\_\_\_\_

11. \_\_\_\_\_

12. \_\_\_\_\_

13. \_\_\_\_\_

14. \_\_\_\_\_

15. \_\_\_\_\_


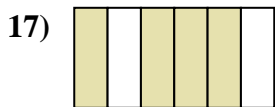
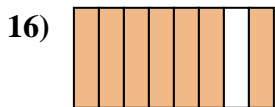
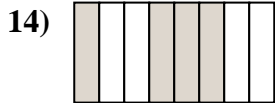
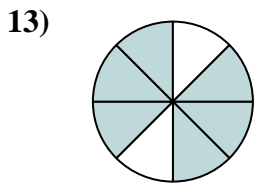
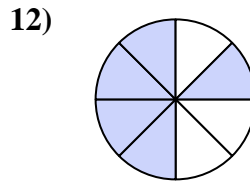
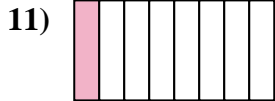
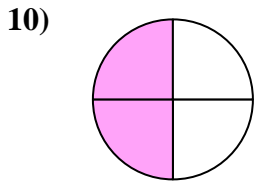
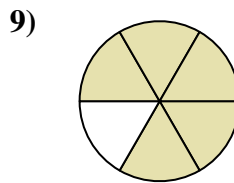
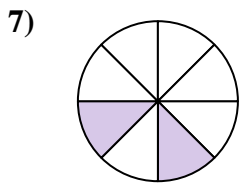
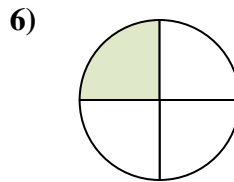
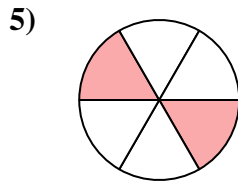
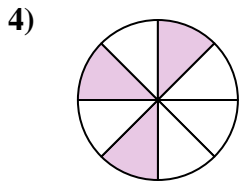
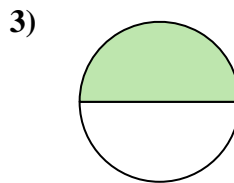
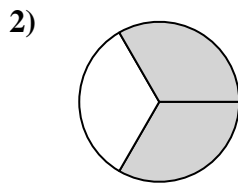
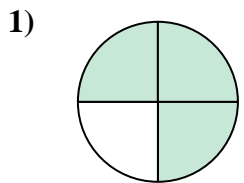
16. \_\_\_\_\_

17. \_\_\_\_\_

18. \_\_\_\_\_



Write the shaded amount as a fraction of the whole amount.



Answers

1.  $\frac{3}{4}$

2.  $\frac{2}{3}$

3.  $\frac{1}{2}$

4.  $\frac{3}{8}$

5.  $\frac{2}{6}$

6.  $\frac{1}{4}$

7.  $\frac{2}{8}$

8.  $\frac{1}{6}$

9.  $\frac{5}{6}$

10.  $\frac{2}{4}$

11.  $\frac{1}{8}$

12.  $\frac{5}{8}$

13.  $\frac{6}{8}$

14.  $\frac{4}{8}$

15.  $\frac{3}{6}$

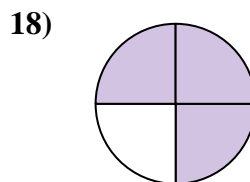
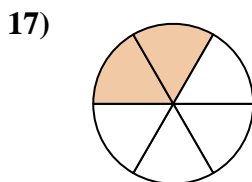
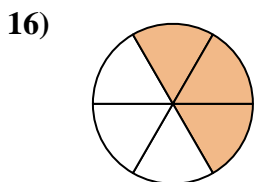
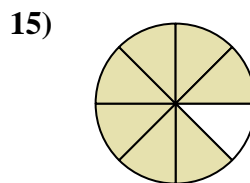
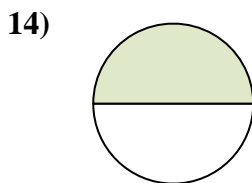
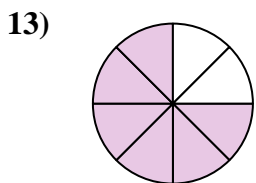
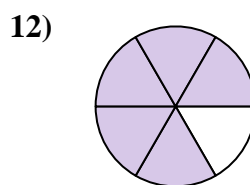

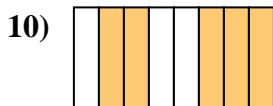
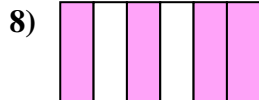
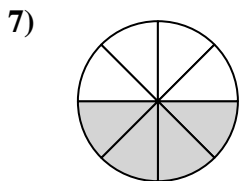
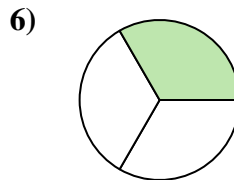
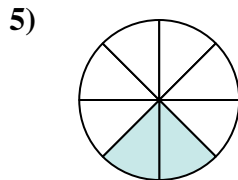
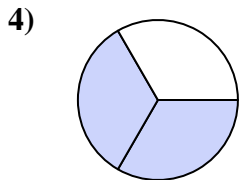
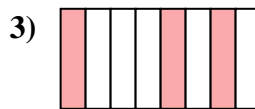
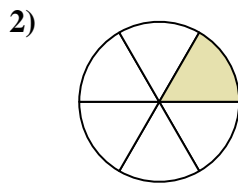
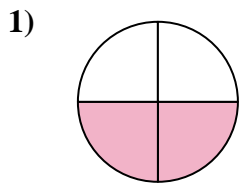
16.  $\frac{7}{8}$

17.  $\frac{4}{6}$

18.  $\frac{1}{3}$



Write the shaded amount as a fraction of the whole amount.

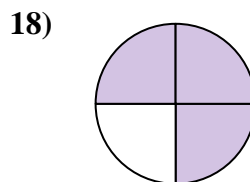
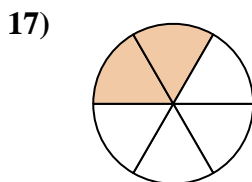
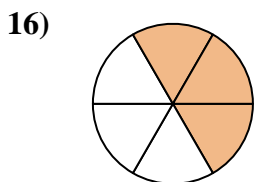
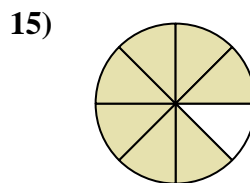
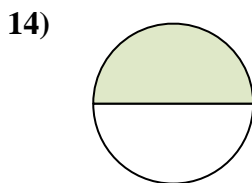
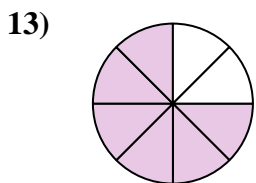
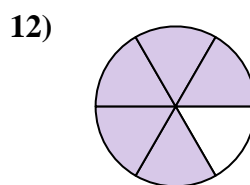

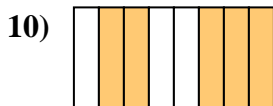
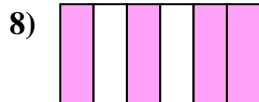
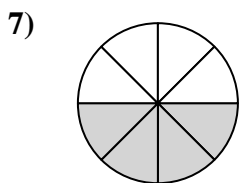
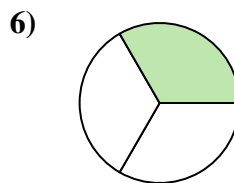
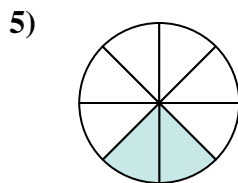
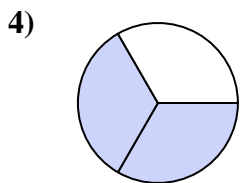
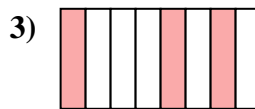
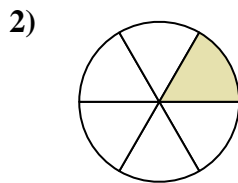
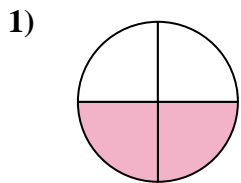


Answers

1. \_\_\_\_\_
2. \_\_\_\_\_
3. \_\_\_\_\_
4. \_\_\_\_\_
5. \_\_\_\_\_
6. \_\_\_\_\_
7. \_\_\_\_\_
8. \_\_\_\_\_
9. \_\_\_\_\_
10. \_\_\_\_\_
11. \_\_\_\_\_
12. \_\_\_\_\_
13. \_\_\_\_\_
14. \_\_\_\_\_
15. \_\_\_\_\_
16. \_\_\_\_\_
17. \_\_\_\_\_
18. \_\_\_\_\_



Write the shaded amount as a fraction of the whole amount.



Answers

1.  $\frac{2}{4}$

2.  $\frac{1}{6}$

3.  $\frac{3}{8}$

4.  $\frac{2}{3}$

5.  $\frac{2}{8}$

6.  $\frac{1}{3}$

7.  $\frac{4}{8}$

8.  $\frac{4}{6}$

9.  $\frac{1}{8}$

10.  $\frac{5}{8}$

11.  $\frac{1}{4}$

12.  $\frac{5}{6}$

13.  $\frac{6}{8}$

14.  $\frac{1}{2}$

15.  $\frac{7}{8}$

16.  $\frac{3}{6}$


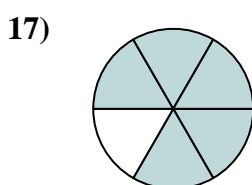

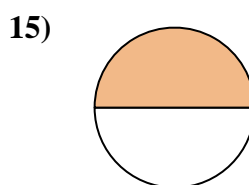
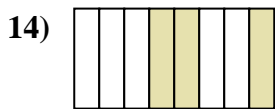
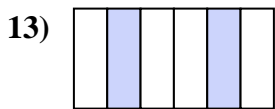
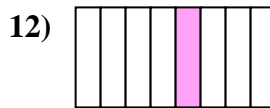
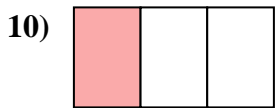
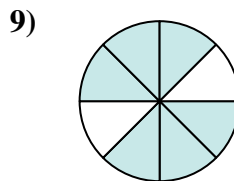
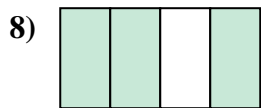
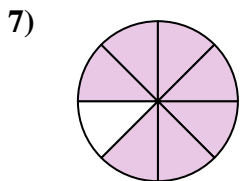
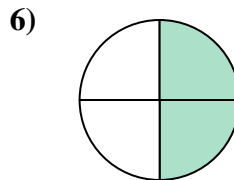
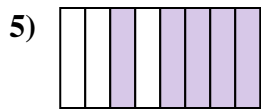
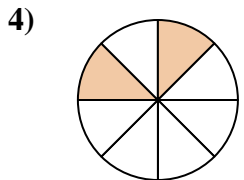
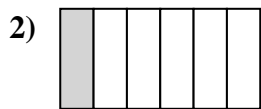
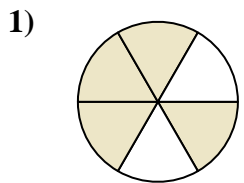
17.  $\frac{2}{6}$

18.  $\frac{3}{4}$





Write the shaded amount as a fraction of the whole amount.


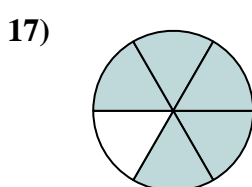

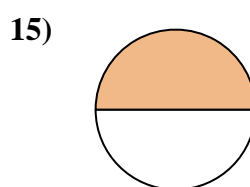
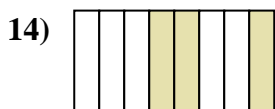
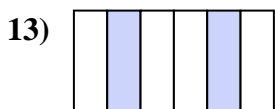
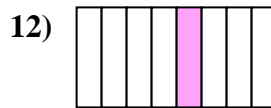
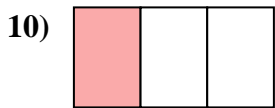
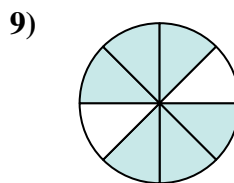
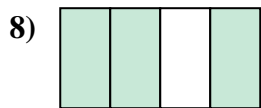
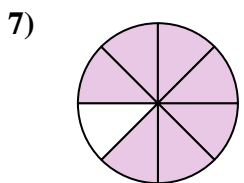
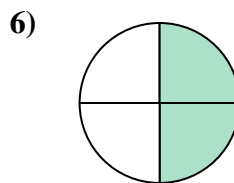
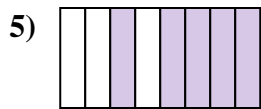
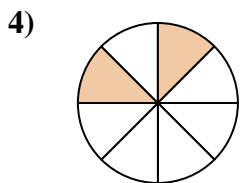
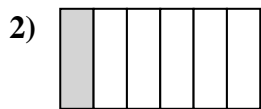
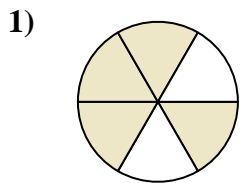


Answers

1. \_\_\_\_\_
2. \_\_\_\_\_
3. \_\_\_\_\_
4. \_\_\_\_\_
5. \_\_\_\_\_
6. \_\_\_\_\_
7. \_\_\_\_\_
8. \_\_\_\_\_
9. \_\_\_\_\_
10. \_\_\_\_\_
11. \_\_\_\_\_
12. \_\_\_\_\_
13. \_\_\_\_\_
14. \_\_\_\_\_
15. \_\_\_\_\_
16. \_\_\_\_\_
17. \_\_\_\_\_
18. \_\_\_\_\_



Write the shaded amount as a fraction of the whole amount.



Answers

1.  $\frac{4}{6}$

2.  $\frac{1}{6}$

3.  $\frac{4}{8}$

4.  $\frac{2}{8}$

5.  $\frac{5}{8}$

6.  $\frac{2}{4}$

7.  $\frac{7}{8}$

8.  $\frac{3}{4}$

9.  $\frac{6}{8}$

10.  $\frac{1}{3}$

11.  $\frac{3}{6}$

12.  $\frac{1}{8}$

13.  $\frac{2}{6}$

14.  $\frac{3}{8}$

15.  $\frac{1}{2}$


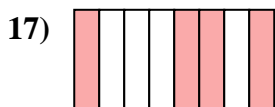
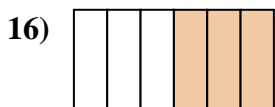
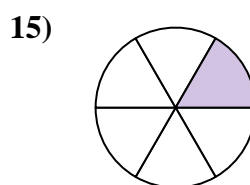
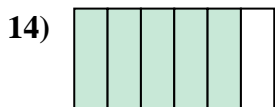

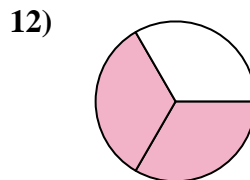
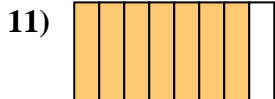
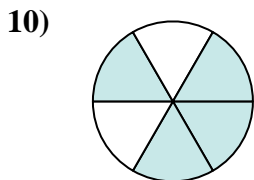

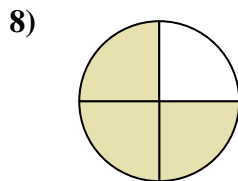
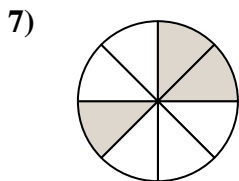
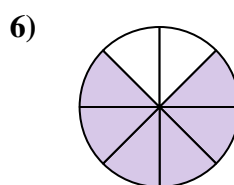
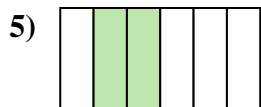
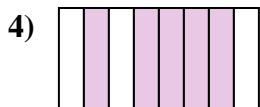

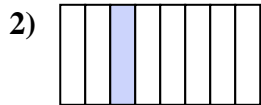
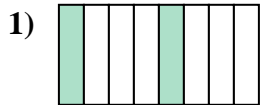
16.  $\frac{2}{3}$

17.  $\frac{5}{6}$

18.  $\frac{1}{4}$



Write the shaded amount as a fraction of the whole amount.


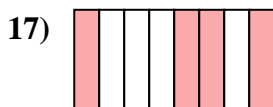
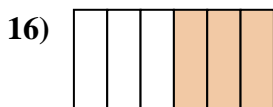
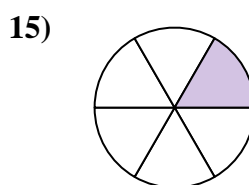


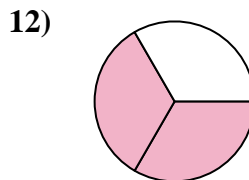
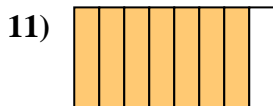
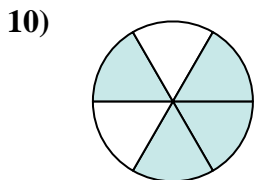

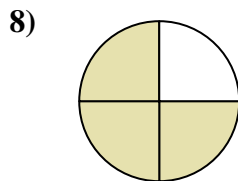
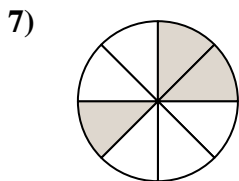
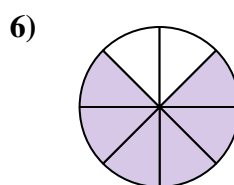
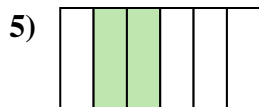
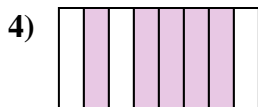
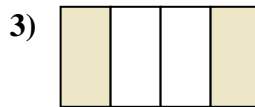
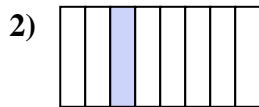
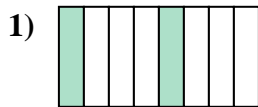


Answers

1. \_\_\_\_\_
2. \_\_\_\_\_
3. \_\_\_\_\_
4. \_\_\_\_\_
5. \_\_\_\_\_
6. \_\_\_\_\_
7. \_\_\_\_\_
8. \_\_\_\_\_
9. \_\_\_\_\_
10. \_\_\_\_\_
11. \_\_\_\_\_
12. \_\_\_\_\_
13. \_\_\_\_\_
14. \_\_\_\_\_
15. \_\_\_\_\_
16. \_\_\_\_\_
17. \_\_\_\_\_
18. \_\_\_\_\_



Write the shaded amount as a fraction of the whole amount.



Answers

1.  $\frac{2}{8}$

2.  $\frac{1}{8}$

3.  $\frac{2}{4}$

4.  $\frac{5}{8}$

5.  $\frac{2}{6}$

6.  $\frac{6}{8}$

7.  $\frac{3}{8}$

8.  $\frac{3}{4}$

9.  $\frac{1}{2}$

10.  $\frac{4}{6}$

11.  $\frac{7}{8}$

12.  $\frac{2}{3}$

13.  $\frac{1}{3}$

14.  $\frac{5}{6}$

15.  $\frac{1}{6}$

16.  $\frac{3}{6}$

17.  $\frac{4}{8}$

18.  $\frac{1}{4}$